

MENIIT

NEET | IIT-JEE | FOUNDATION

Corporate Office: 44-A/1, Kalu Sarai, New Delhi 110016 | **Web:** www.meniit.com

JEE MAIN-2021

COMPUTER BASED TEST (CBT)

DATE : 31-08-2021 (MORNING SHIFT) | TIME : (9.00 am to 12.00 pm)

Duration 3 Hours | Max. Marks : 300

**QUESTION
&
SOLUTIONS**

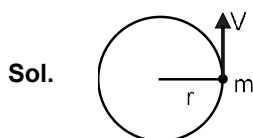
PART A : PHYSICS

Single Choice Type

This section contains **20 Single choice questions**. Each question has 4 choices (1), (2), (3) and (4) for its answer, out of which **Only One** is correct.

1. Angular momentum of a single particle moving with constant speed along circular path
- (1) Changes in magnitude but remains same in the direction
 - (2) is zero
 - (3) remains same in magnitude and direction
 - (4) remains same in magnitude but changes in the direction

Ans. (3)

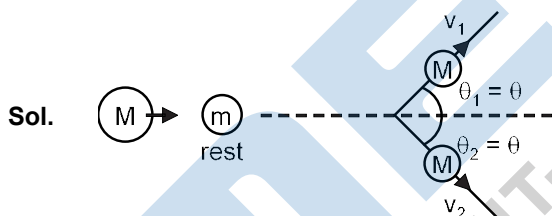


$$\vec{L} = \vec{r} \times \vec{p} = \vec{r} \times m\vec{v}$$

2. A body of mass M moving at speed V_0 collides elastically with a mass 'm' at rest. After the collision, the two masses move at angles θ_1 and θ_2 with respect to the initial direction of motion of the body of mass M. The largest possible value of the ratio M/m, for which the angles θ_1 and θ_2 will be equal, is :

- (1) 1
- (2) 4
- (3) 2
- (4) 3

Ans. (4)



Linear momentum conservation

- (i) y-direction

$$mv_2 \sin\theta = mv_1 \sin\theta$$

$$mv_2 = mv_1 \quad \dots\dots(1)$$

- (ii) x-direction

$$mv_0 = mv_2 \cos\theta + mv_1 \cos\theta \quad \dots\dots(2)$$

from (1) and (2)

$$mv_0 = mv_2 \cos\theta + mv_2 \cos\theta$$

$$mv_0 = 2mv_2 \cos\theta \quad \dots\dots(3)$$

- (iii) $e = 1$ given

$$\frac{v_2 - v_1 \cos 2\theta}{v_0 \cos \theta} = 1$$

$$v_2 - v_1 \cos 2\theta = v_0 \cos \theta \quad \dots\dots(4)$$

$$v_2 - \frac{mv_2}{M} \cos 2\theta = v_0 \cos \theta$$

$$v_2 \left(1 - \frac{m}{M} \cos 2\theta\right) = v_0 \cos \theta$$

$$\frac{mv_0}{2m \cos \theta} \left(1 - \frac{m}{M} \cos 2\theta\right) = v_0 \cos \theta$$

$$M - m \cos 2\theta = 2m \cos^2 \theta ;$$

$$M = 2m \cos^2 \theta = m(2 \cos^2 \theta - 1)$$

$$\frac{M}{m} = 4 \cos^2 \theta - 1$$

$$\frac{M}{m}_{\max} = 4 - 1 = 3$$

3. In an ac circuit, an inductor, a capacitor and a resistor are connected in series with $X_L = R = X_C$. Impedance of this circuit is :

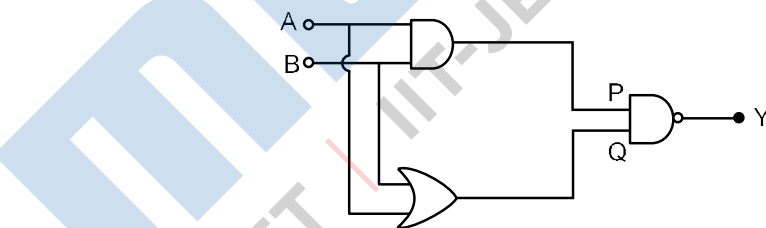
- (1) $R\sqrt{2}$ (2) R (3) $2R^2$ (4) Zero

Ans. (2)

Sol. $Z = \sqrt{(X_L - X_C)^2 + R^2}$

$Z = R$

4. In the following logic circuit the sequence of the inputs A, B are (0, 0), (0, 1), (1, 0) and (1, 1). The output Y for this sequence will be:



- (1) 0, 0, 1, 1 (2) 1, 0, 1, 0 (3) 0, 1, 0, 1 (4) 1, 1, 1, 0

Ans. (4)

A	B	Y
0	0	1
0	1	1
1	0	1
1	1	0

Sol.

5. A reversible engine has an efficiency of $\frac{1}{4}$. If the temperature of the sink is reduced by 58°C , its efficiency becomes double. Calculate the temperature of the sink:
 (1) 180.4°C (2) 382°C (3) 174°C (4) 280°C

Ans. (3)

Sol.

$$1 - \frac{T_L}{T_H}$$

$$\frac{1}{4} = 1 - \frac{T_L}{T_H}$$

$$\frac{T_L}{T_H} = \frac{3}{4}$$

$$2 \left(1 - \frac{T_L - 58}{T_H} \right) = 1 - \frac{T_L}{T_H}$$

$$\frac{T_L - 58}{T_H} = \frac{1}{2}$$

$$\frac{T_L}{T_H} = \frac{3/4}{1/2}$$

$$2 T_L = 3 T_H - 174$$

$$T_L = 174^\circ\text{C}$$

6. Match List-I with List-II.

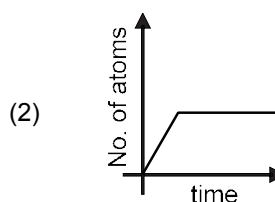
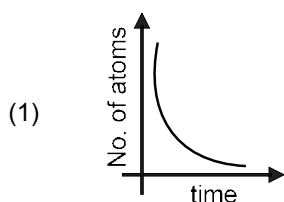
List-I	List-II
(a) Torque	(i) MLT^{-1}
(b) Impulse	(ii) MT^{-2}
(c) Tension	(iii) ML^2T^{-2}
(d) Surface	(iv) MLT^{-2}

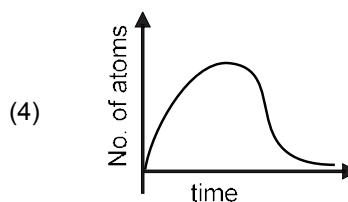
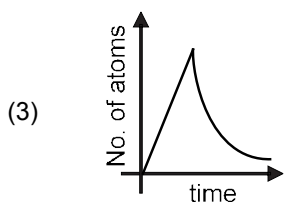
Choose the most appropriate answer from the option given below:

- (1) (a)-(iii), (b)-(iv), (c)-(i), (d)-(ii) (2) (a)-(ii), (b)-(i), (c)-(iv), (d)-(iii)
 (3) (a)-(i), (b)-(iii), (c)-(iv), (d)-(ii) (4) (a)-(iii), (b)-(i), (c)-(iv), (d)-(ii)

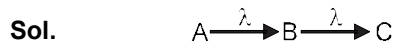
Ans. (4)

7. A sample of a radioactive nucleus A disintegrates to another radioactive nucleus B, which in turn disintegrates to some other stable nucleus C. Plot of a graph showing the variation of number of atoms of nucleus B versus time is : (Assume that at $t = 0$, there are no B atoms in the sample)





Ans. (4)



$t = 0$ N_0 0 0

$t = t$ $N_0 e^{-\lambda t}$ N N_C

Where λ = decay constant

$\frac{dN}{dt}$ decay rate of A – decay rate of B

$= N_0 e^{-\lambda t} - \lambda N$

$\frac{dN}{dt}$ slope of N v/s t graph

$\frac{d^2N}{dt^2}$ $N_0 e^{-\lambda t} (-\lambda)$ [$N_0 e^{-\lambda t} > 0$]

$\frac{d^2N}{dt^2}$ ve so graph is (a)

8. An object is placed at the focus of concave lens having focal length f . What is the magnification and distance of the image from the optical centre of the lens?

(1) $1/2, f/2$

(2) $1/4, f/4$

(3) $1, \infty$

(4) very high, ∞

Ans. (1)

Sol. $\frac{1}{F} = \frac{1}{v} - \frac{1}{u}$

Put $u = -f$ $F = -f$

$\frac{1}{-f} = \frac{1}{v} - \frac{1}{-f}$; $\frac{1}{-f} = \frac{1}{f} - \frac{1}{v}$; $\frac{2}{f} = \frac{1}{v}$ $v = \frac{f}{2}$

Magnification = $v/u = \frac{f/2}{-f} = -\frac{1}{2}$

9. The masses and radii of the earth and moon are (M_1, R_1) and (M_2, R_2) respectively. Their centers are at a distance r apart. Find the minimum escape velocity for a particle of mass m to be projected from the middle of these two masses :

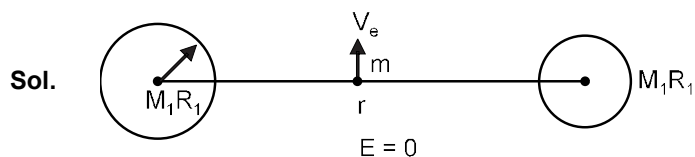
(1) $v = \frac{1}{2} \sqrt{\frac{2G(M_1 + M_2)}{r}}$

(2) $v = \sqrt{\frac{4G(M_1 + M_2)}{r}}$

(3) $v = \frac{\sqrt{2G(M_1 + M_2)}}{r}$

(4) $v = \frac{1}{2} \sqrt{\frac{4G(M_1 + M_2)}{r}}$

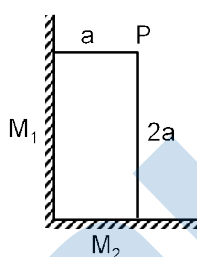
Ans. (2)



$$\frac{GM_1}{r/2} - \frac{GM_2}{r/2} - m \frac{1}{2}mv_e^2 = 0$$

$$V_e = \sqrt{\frac{4G(M_1 + M_2)}{r}}$$

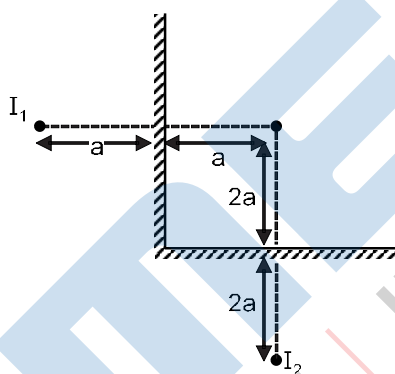
10. Two plane mirror M_1 and M_2 are at right angle to each other shown. A point source 'P' is placed at 'a' and '2a' meter away from M_1 and M_2 respectively. The shortest distance between the images thus formed is: (Take $\sqrt{5} = 2.3$)



- (1) $4.6a$ (2) $2\sqrt{10}a$ (3) $3a$ (4) $2.3a$

Ans. (1)

Sol.

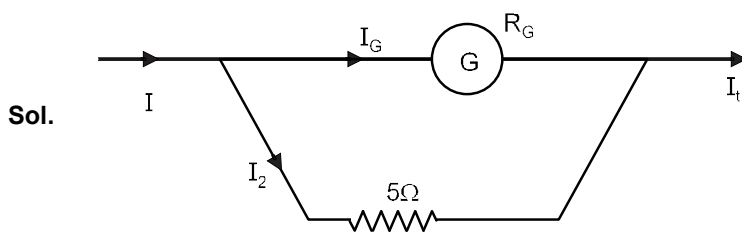


Distance between I_1 and $I_2 = \sqrt{(4a)^2 + (2a)^2} = 4.6a$

11. Consider a galvanometer shunted with 5Ω resistance and 2% of current passes through it. What is the resistance of the given galvanometer?

- (1) 226Ω (2) 245Ω (3) 344Ω (4) 300Ω

Ans. (2)



$$I_G = \frac{2}{100} I \quad (\text{Given})$$

$$I_G = 5\Omega \times I$$

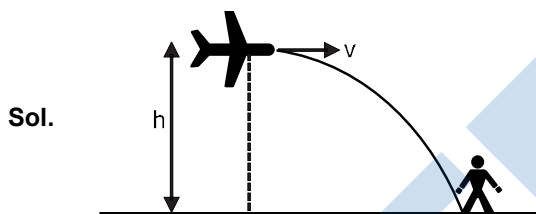
$$(R_G + 5\Omega)$$

$$\frac{5}{R_G} = \frac{1}{50} \Rightarrow 250 = R_G + 5 \Rightarrow R_G = 245 \Omega$$

12. A helicopter is flying horizontally with a speed v at an altitude h has to drop a food packet for a man on the ground. What is the distance of helicopter from the man when the food packet is dropped ?

- (1) $\sqrt{\frac{2ghv^2}{h^2} - 1}$ (2) $\sqrt{2ghv^2 - h^2}$ (3) $\sqrt{\frac{2gh}{v^2} - h^2}$ (4) $\sqrt{\frac{2v^2h}{g} - h^2}$

Ans. (4)



The aeroplane imparts v velocity to the food packet horizontally when dropping.

Horizontal range of food packet $v \sqrt{\frac{2h}{g}}$

Also, Horizontal distance, travelled by aeroplane $v \sqrt{\frac{2h}{g}}$

thus, vertical distance between aeroplane and person = h

distance $\sqrt{\frac{2v^2h}{g} - h^2}$

13. A moving proton and electron have the same de-Broglie wavelength. If K and P denote the K.E. and momentum respectively. Then choose the correct option :

- (1) $K_p < K_e$ and $P_p = P_e$ (2) $K_p > K_e$ and $P_p = P_e$
 (3) $K_p = K_e$ and $P_p = P_e$ (4) $K_p < K_e$ and $P_p < P_e$

Ans. (1)

Sol. $\lambda_{deb} = \frac{h}{p} = \frac{h}{\sqrt{2m \text{ K.E.}}}$

If λ is same the P will be same

$$KE \propto 1/m$$

$$m_p > m_e \Rightarrow K_p < K_e$$

14. For an ideal gas the instantaneous change in pressure 'p' with volume 'v' is given by the equation $dp/dv = -ap$. If $p = p_0$ at $v = 0$ is the given boundary condition, then the maximum temperature one mole of gas can attain is : (Here R is the gas constant)

- (1) $\frac{ap_0}{eR}$ (2) $\frac{p_0}{aeR}$ (3) infinity (4) 0°C

Ans. (2)

Sol. $\frac{dP}{dV} = -aP$

$$\int_{p_0}^P \frac{dP}{P} = \int_0^v -a dv \quad \ln \frac{P}{p_0} = -av$$

$$P = p_0 e^{-av}$$

Now, $PV = RT$ (as $n = 1$)

$$P = V \frac{dP}{dV} = R \frac{dT}{dV} \quad \text{[for maximum T, } \frac{dT}{dV} = 0]$$

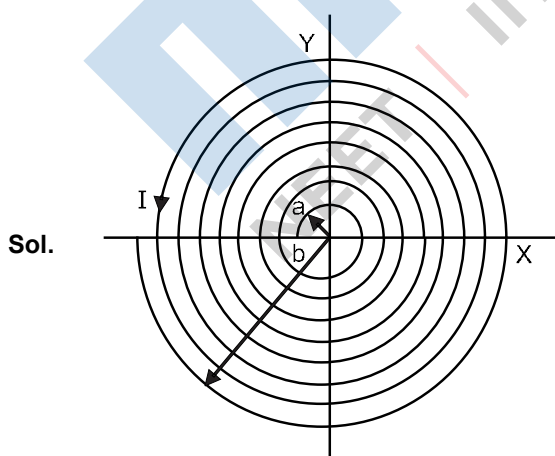
$$P = -aPV \quad 0 = V \frac{1}{a}$$

$$\text{Thus, } T = \frac{PV}{R} = \frac{p_0 e^{-1}}{Ra} = \frac{p_0}{eRa}$$

15. A coil having N turns is wound tightly in the form of a spiral with inner and outer radii 'a' and 'b' respectively. Find the magnetic field at centre, when a current I passes through coil :

- (1) $\frac{\mu_0 I}{a(a-b)} \frac{1}{a} \frac{1}{b}$ (2) $\frac{\mu_0 IN}{2(a-b)} \log_e \frac{b}{a}$ (3) $\frac{\mu_0 I}{8} \frac{a-b}{a-b}$ (4) $\frac{\mu_0 I}{8} \frac{a-b}{a-b}$

Ans. (2)



$$B \quad \frac{{}_0dNi}{2x} \quad \frac{{}_0 \frac{N}{b} dx}{2x} \quad \frac{{}_0Ni}{2(b-a)} \ln \frac{b}{a}$$

16. A uniform heavy rod of weight 10 kg ms^{-2} , cross-sectional area 100 cm^2 and length 20 cm is hanging from a fixed support. Young modulus of the material of the rod is $2 \times 10^{11} \text{ Nm}^{-2}$. Neglecting the lateral contraction, find the elongation of rod due to its own weight :

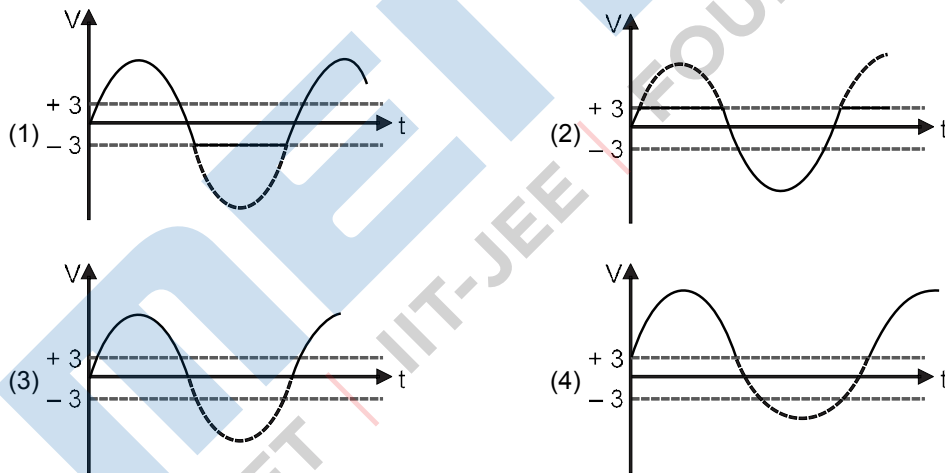
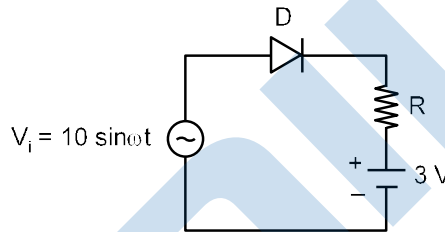
- (1) $4 \times 10^{-8} \text{ m}$ (2) $5 \times 10^{-10} \text{ m}$ (3) $2 \times 10^{-9} \text{ m}$ (4) $5 \times 10^{-8} \text{ m}$

Ans. (2)

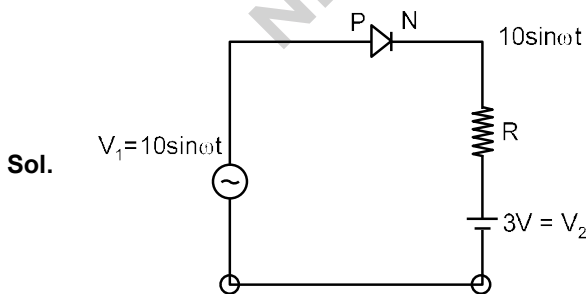
Sol. Elongation due to self weight $\frac{w l}{2YA}$

$$\frac{10 \cdot 0.2}{2 \cdot 2 \cdot 10^{11} \cdot 100 \cdot 10^{-4}} = 5 \cdot 10^{-10} \text{ m}$$

17. Choose the correct waveform that can represent the voltage across R of the following circuit, assuming the diode is ideal one:

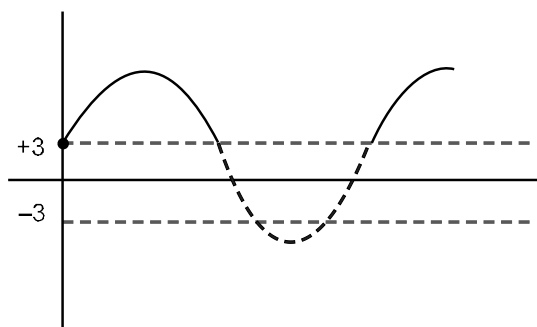


Ans. (4)

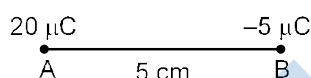


Current will flow from the diode when diode is in forward biased.

Thus $\Delta V = (10 \sin \omega t - 3) \text{ V}$ and ΔV will be 'zero', when diode is reverse biased.

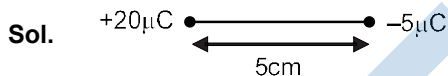


18. Two particles A and B having charges $20 \mu\text{C}$ and $-5 \mu\text{C}$ respectively are held fixed with a separation of 5 cm. At what position a third charged particle should be placed so that it does not experience a net electric force?

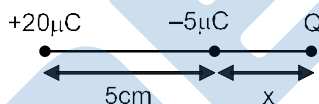


- (1) At midpoint between two charges
- (2) At 1.25 cm from a $-5 \mu\text{C}$ between two charges
- (3) At 5 cm from $20 \mu\text{C}$ on the left side of system
- (4) At 5 cm from $-5 \mu\text{C}$ on the right side

Ans. (4)



Charge should be placed near $-5 \mu\text{C}$ at x distance



$$\frac{K(20)Q}{(5-x)^2} = \frac{K(5)Q}{x^2}$$

$$4x^2 = (5+x)^2$$

$$4x^2 = 25 + x^2 + 10x$$

$$3x^2 - 10x - 25 = 0 \Rightarrow x = 5$$

19. A small square loop of side 'a' and one turn is placed inside a larger square loop of side b and one turn ($b > a$). The two loops are coplanar with their centres coinciding. If a current I is passed in the square loop of side 'b', then the coefficient of mutual inductance between the two loops is:

(1) $\frac{0}{4} 8\sqrt{2} \frac{b^2}{a}$

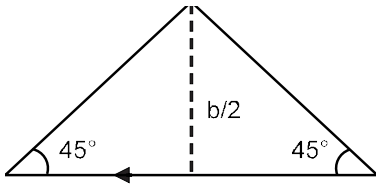
(2) $\frac{0}{4} \frac{8\sqrt{2}}{b}$

(3) $\frac{0}{4} \frac{8\sqrt{2}}{a}$

(4) $\frac{0}{4} 8\sqrt{2} \frac{a^2}{a}$

Ans. (4)

Sol.



$$B = 4 \frac{\frac{0j}{b} \sqrt{2}}{\frac{b}{2}}$$

$$B = \frac{2\sqrt{2}}{b} \frac{0j}{b}$$

$$\Rightarrow \phi = MI$$

$$\Rightarrow BA = MI$$

$$\frac{2\sqrt{2}}{b} \frac{0j}{b} a^2 \quad Mi$$

$$B = \frac{2\sqrt{2}}{b} \frac{0j}{b}$$

20. Which of the following equations is dimensionally incorrect?

Where t = time, h = height, s = surface tension, θ = angle, ρ = density, a, r = radius, g = acceleration due to gravity, v = volume, p = pressure, W = work done, Γ = torque, ϵ = permittivity, E = electric field, J = current density, L = length.

(1) $J = \frac{E}{t}$

(2) $v = \frac{pa^4}{8L}$

(3) $h = \frac{2s \cos \theta}{rg}$

(4) $W = \Gamma \theta$

Ans. (2)

Numeric Value Type

This Section contains **10 Numeric Value Type question**, out of 10 only 5 have to be done.

1. If the sum of the heights of transmitting and receiving antennas in the line of sight of communication is fixed at 160 m, then the maximum range of LOS communication is _____ km

(Take radius of Earth = 6400 km)

Ans. (64)

Sol. $h_r + h_t = 160$ (Given)

$$\text{LOS} = \sqrt{2R} \sqrt{h_r} + \sqrt{h_t}$$

$$\text{LOS} = \sqrt{2R} \sqrt{h_r} + \sqrt{160 - h_r}$$

$$\frac{d\text{LOS}}{dh_r} = 0 \Rightarrow \sqrt{2R} \frac{1}{2\sqrt{h_r}} - \frac{1}{2\sqrt{160 - h_r}} = 0$$

$$h_r = h_t = 80 \text{ m}$$

$$\text{LOS} = \sqrt{2R} \sqrt{80} + \sqrt{80} = 2\sqrt{2 \times 6400 \times 10^3} + 80 = 64 \text{ Km}$$

2. A wire having a linear mass density 9.0×10^{-4} kg/m is stretched between two rigid supports with a tension of 900 N. the wire resonates at a frequency of 500 Hz. The next higher frequency at which the same wire resonates is 550 Hz. The length of the wire is _____ m.

Ans. (10)

Sol. $f_n = \frac{nv}{2l} = 500$

$$f_{n+1} = \frac{(n+1)v}{2l} = 550$$

$$\frac{n+1}{n} = \frac{11}{10}$$

Thus, $n = 10$

$$\text{Thus, } l = \frac{nv}{2f_n} = \frac{v}{2} \sqrt{\frac{T}{\mu}}$$

$$= \frac{10}{2 \times 500} \sqrt{\frac{900}{9 \times 10^{-4}}} = 10 \text{ m}$$

Ans. 10.00

3. A particles of mass 1 kg is hanging from a spring of force constant 100 Nm^{-1} . The mass is pulled slightly downward and released so that it executes free simple harmonic motion with time period T. The time when the kinetic energy and potential energy of the system will become equal, is $\frac{T}{x}$. The value of x is _____.

Ans. (8)

Sol. $KE = PE$

$$\frac{1}{2}k(A^2 - x^2) = \frac{1}{2}kx^2$$

$$x^2 = \frac{A^2}{2}$$

$$x = \frac{A}{\sqrt{2}}$$

$$y = A \sin \omega t$$

$$\frac{A}{\sqrt{2}} = A \sin t$$

$$\sin \frac{\pi}{4} = \sin t$$

$$t = \frac{\pi}{4}; t = \frac{T}{8}. \text{ Thus } x = 8$$

4. The electric field in an electromagnetic wave is given by $E = (50 \text{ NC}^{-1}) \sin \omega (t - x/c)$. The energy contained in a cylinder of volume V is $5.5 \times 10^{-12} \text{ J}$. the value of V is _____ cm^3 .
(given $\epsilon_0 = 8.8 \times 10^{-12} \text{ C}^2 \text{ N}^{-1} \text{ m}^{-2}$)

Ans. (500)

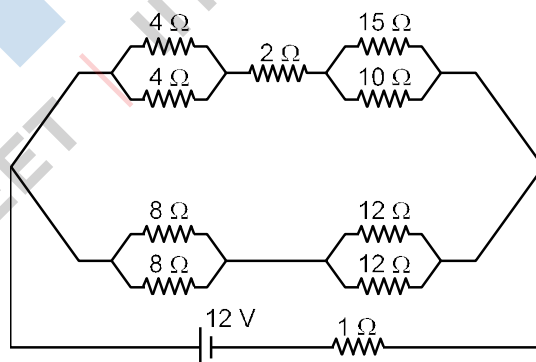
Sol. Energy density $\frac{1}{2} \epsilon_0 E^2$

$$\text{Energy} = \frac{1}{2} \epsilon_0 E^2 \text{ Volume}$$

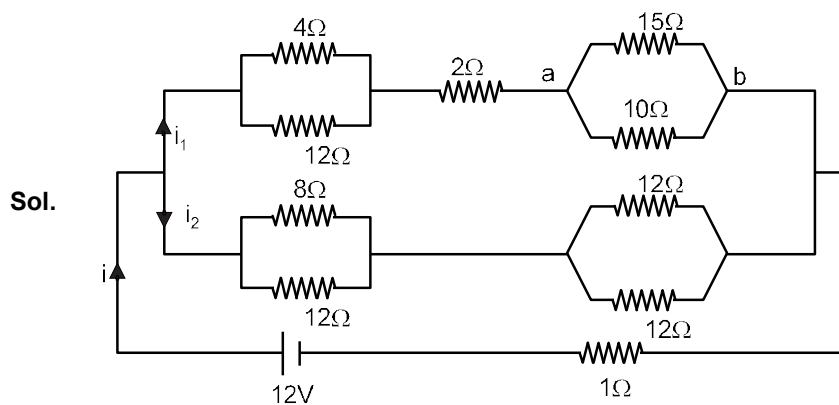
$$5.5 \times 10^{-12} = \frac{1}{2} \times 8.8 \times 10^{-12} \times 50^2 \times V$$

$$V = 500 \text{ cm}^3$$

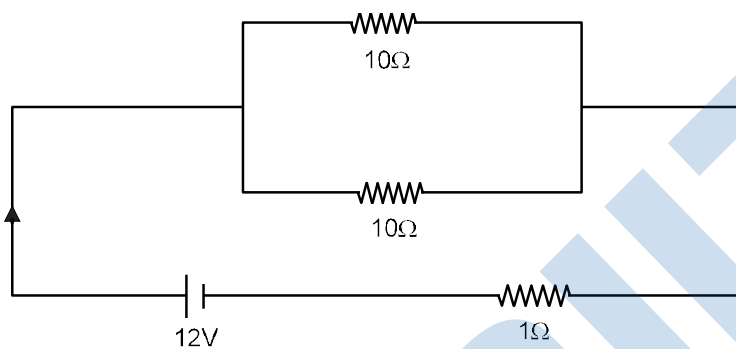
5. The voltage drop across 15Ω resistance in the given figure will be _____ v.



Ans. (6)



equivalent circuit



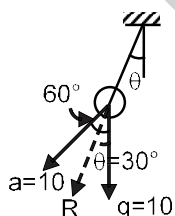
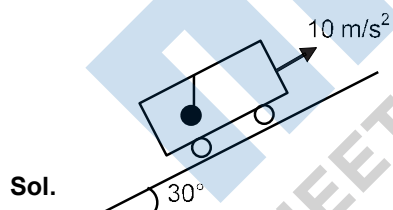
$$i = \frac{12}{6} = 2A$$

$$i_1 = i_2 = i/2 = 1A$$

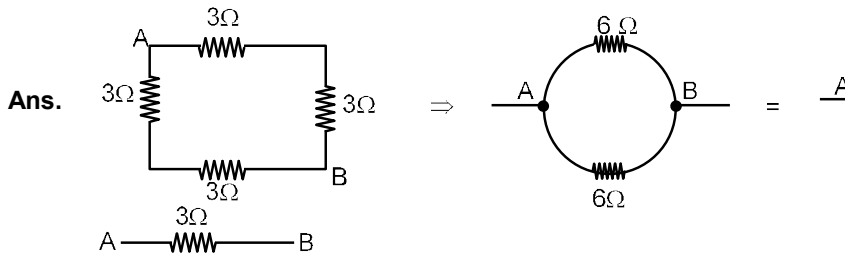
$$V_{15\Omega} = i_1 \times R_{ab} = 1 \times 6 = 6V$$

6. A car is moving on a plane inclined at 30° to be horizontal with an acceleration of 10 ms^{-2} parallel to the plane upward. A bob is suspended by a string from the roof of car. The angle in degrees which the string makes with the vertical is _____. (Given $g = 10 \text{ ms}^{-2}$)

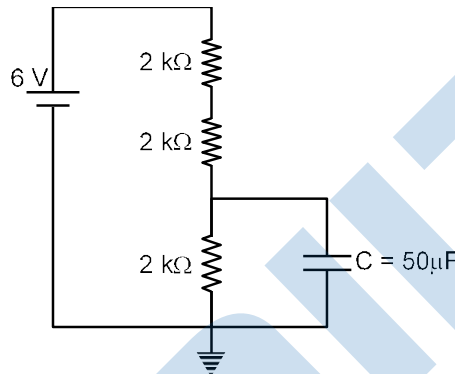
Ans. 30



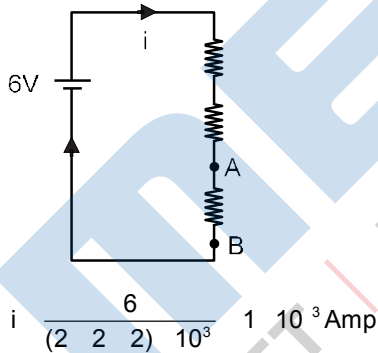
7. A square shaped wire with resistance of each side $3\ \Omega$ is bent to form a complete circle. The resistance between two diametrically opposite points of the circle in unit of Ω will be _____.



8. A capacitor of $50\ \mu\text{F}$ is connected in a circuit as shown in figure. The charge on the upper plate of the capacitor is _____ μC .



- Ans. 10
 Sol. At steady state current through branch of capacitor is zero. Potential difference across capacitor is 2V.
 So, $q = 50 \times 2 = 100\ \mu\text{C}$



$V_{A,B}$ = potential across $50\ \mu\text{F}$

$V_{A,B} = i \times 2 \times 10^3 = 1 \times 10^{-3} \times 2 \times 10^3 = 2\ \text{volt}$

Charge on $50\ \mu\text{F}$

$q = CV = 50 \times 10^{-6} \times 2 \Rightarrow 100 \times 10^{-6}\ \text{C} = 100\ \mu\text{C}$

9. When a rubber ball is taken to a depth of _____ m in deep sea, its volume decrease by 0.5%.
 (The bulk modulus of rubber = $9.8 \times 10^8\ \text{Nm}^{-2}$, Density of sea water = $10^3\ \text{kgm}^{-3}$, $g = 9.8\ \text{m/s}^2$)

Ans. 500

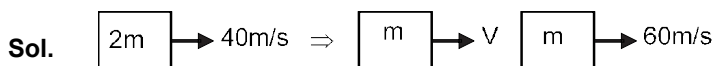
Sol. $\frac{dv}{v} = \frac{0.5}{100} = 0.005$

B $\frac{dp}{dv} = \frac{pgh}{v}$

$9.8 \times 10^8 = \frac{10^3 \times 9.8 \times d}{5 \times 10^3}$ $d = 500\text{m}$

10. A block moving horizontally on a smooth surface with a speed of 40 ms^{-1} splits into two equal parts. If one of the parts moves at 60 ms^{-1} in the same direction, then the fractional change in the kinetic energy will be $x : 4$ where $x =$ _____

Ans. 1



Initial

Final

$2m \times 40 = m \times v + m \times 60$

$v = 20 \text{ m/s}$

Now $KE = KE_i = KE_f = \frac{1}{2}m (20)^2 = \frac{1}{2}m (60)^2 = \frac{1}{2}2m (40)^2$

$KE = \frac{1}{2}m (800) = KE_f = \frac{1}{2}2m (40)^2 = \frac{1}{2}m \times 3200$

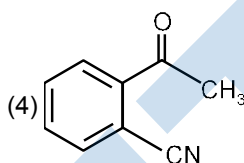
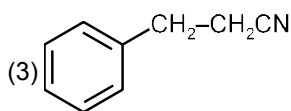
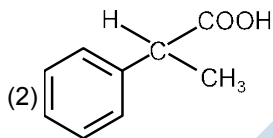
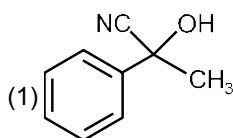
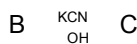
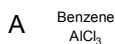
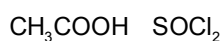
Fractional change $\frac{KE}{KE_i} = \frac{1}{4}$

PART B : CHEMISTRY

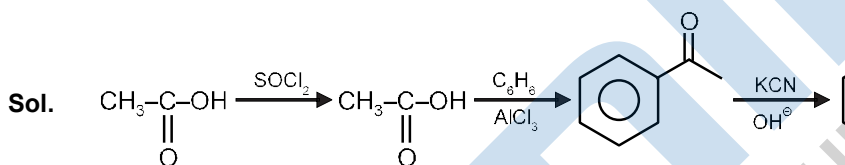
Single Choice Type

This section contains **20 Single choice questions**. Each question has 4 choices (1), (2), (3) and (4) for its answer, out of which **Only One** is correct.

1. The structure of product C, formed by the following sequence of reactions is :



Ans. (1)



2. Which one of the following lanthanides exhibits +2 oxidation state with diamagnetic nature.

(Given Z for Nd = 60, Yb = 70, La = 57, Ce = 58)

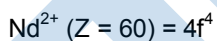
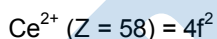
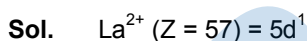
(1) Yb

(2) La

(3) Nd

(4) Ce

Ans. (1)



Yb^{2+} Contain no unpaired electron. So it is diamagnetic and Colourless.

3. Given below are two statements : one is labelled as Assertion (A) and the other is labelled as Reason (R).

Assertion (A) : Aluminium is extracted from bauxite by the electrolysis of molten mixture of Al_2O_3 with cryolite.

Reason (R) : The oxidation state of Al in cryolite is +3

In the light of the above statements, choose the most appropriate answer from the options given below

(1) (A) is false but (R) is true.

(2) (A) is true but (R) is false.

(3) Both (A) and (R) are correct and (R) is the correct explanation of (A).

(4) Both (A) and (R) are correct and (R) is not the correct explanation of (A).

Ans. (4)

Sol. In electrolytic reduction of Al_2O_3 we use cryolite to increase conductivity and decrease melting point. Cryolyte is Na_3AlF_6 , Oxidation number of Al is +3

4. Given below are two statements :

Statement I : The process of producing syn-gas is called gasification of coal.

Statement II : The composition of syn-gas is $CO + CO_2 + H_2$ (1 : 1 : 1)

In the light of the above statements, choose the most appropriate answer from the options given below:

(1) Both Statement I and Statement II are true. (2) Statement I is false but Statement II is true.

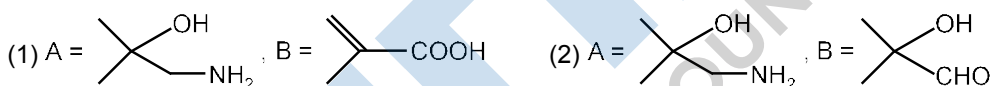
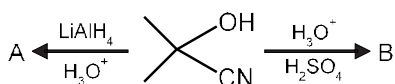
(3) Both Statement I and Statement II are false. (4) Statement I is true but Statement II is false.

Ans. (4)

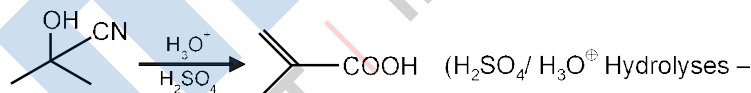
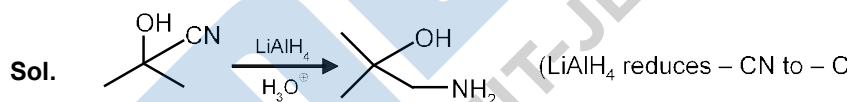
Sol. \Rightarrow Mixture of CO and H_2 is called water gas or syn gas

\Rightarrow Syn gas is produced by coal gasification $C(s) + H_2O(g) \xrightarrow{1270K} CO(g) + H_2(g)$

5. The major products A and B in the following set of reactions are :

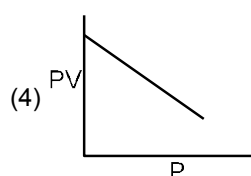
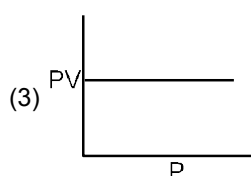
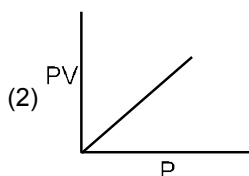
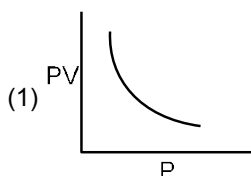


Ans. (1)



Alcohol undergoes elimination reaction in presence of H_2SO_4 / H_3O^+

6. Which one of the following is the correct PV vs P plot at constant temperature for an ideal gas? (P and V stand for pressure and volume of the gas respectively)



Ans. (3)

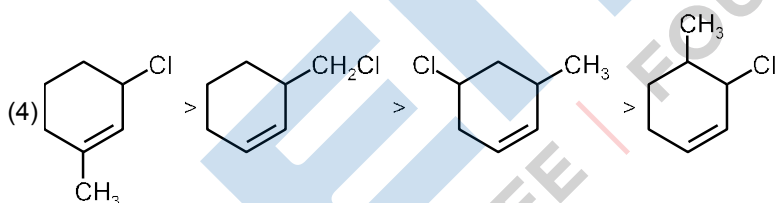
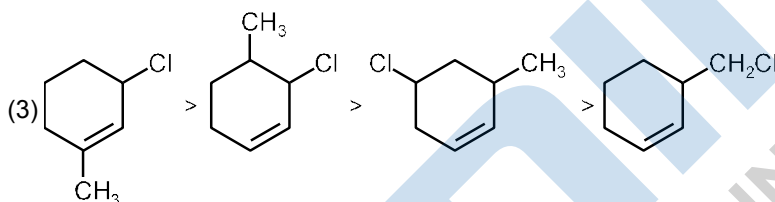
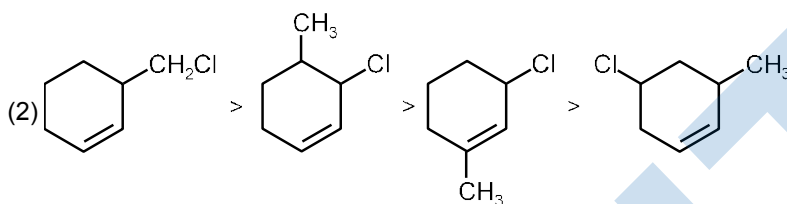
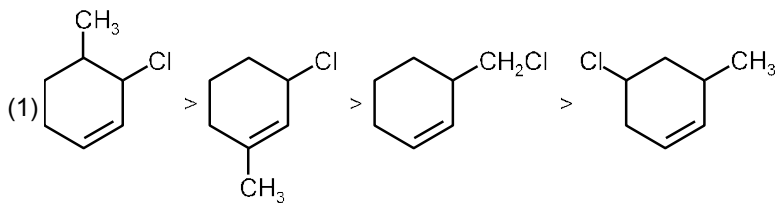
Sol. From ideal gas equation

$$PV = nRT \quad [\text{At constant temperature for fixed amount of ideal gas}]$$

$$PV = \text{constant}$$

So, As $P \uparrow \Rightarrow PV$ remain constant.

7. The correct order of reactivity of the given chlorides with acetate in acetic acids is :



Ans. (3)

Sol. The given compounds in Acetate in Acetic acid solution reacts through S_N1 mechanism.

The stability of carbocation is directly proportion to reactivity via S_N1 mechanism.

8. Given below are two statements : one is labelled as Assertion (A) and the other is labelled as Reason (R).

Assertion (A) : Treatment of bromine water with propene yields 1-bromopropan-2-ol.

Reason (R) : Attack of water on bromonium ion follows Markovnikov rule and results in 1-bromopropan-2-ol.

In the light of the above statements, choose the most appropriate answer from the options given below:

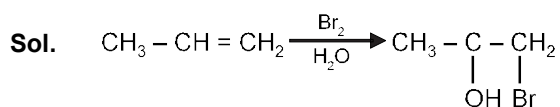
(1) (A) is false but (R) is true.

(2) Both (A) and (R) are true and (R) is the correct explanation of (A).

(3) (A) is true but (R) is false.

(4) Both (A) and (R) are true and (R) is not the correct explanation of (A).

Ans. (2)



Markovnikov's rule of addition : In an electrophilic addition reaction to alkenes and alkynes the electrophile attacks in such a way that a more stable carbocation intermediate is formed on which nucleophile attacks in the next step.

9. The denticity of an organic ligand, biuret is :

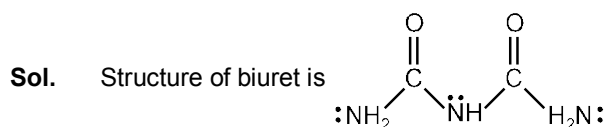
(1) 6

(2) 2

(3) 3

(4) 4

Ans. (2)



in biuret donor atom are 2 nitrogen atom.

so it is a bidentate ligand.

10. In the structure of the dichromate ion, there is a :

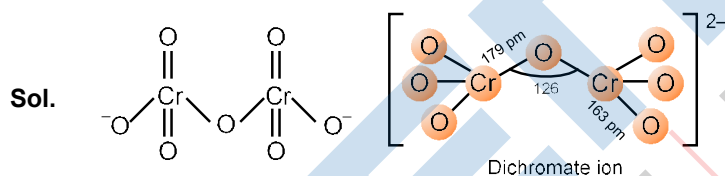
(1) non-linear unsymmetrical Cr–O–Cr bond.

(2) non-linear symmetrical Cr–O–Cr bond.

(3) linear unsymmetrical Cr–O–Cr bond.

(4) linear symmetrical Cr–O–Cr bond.

Ans. (2)



Non-linear, Symmetrical Cr – O – Cr bond

11. The major component/ ingredient of Portland Cement is :

(1) tricalcium aluminate

(2) tricalcium silicate

(3) dicalcium silicate

(4) dicalcium aluminate

Ans. (2)

Sol. Portland cement contain

(i) dicalcium silicate = 26%, (ii) Tricalcium silicate = 51%, (iii) Tricalcium aluminate = 11%

12. Monomer of Novolac is :

(1) phenol and melamine.

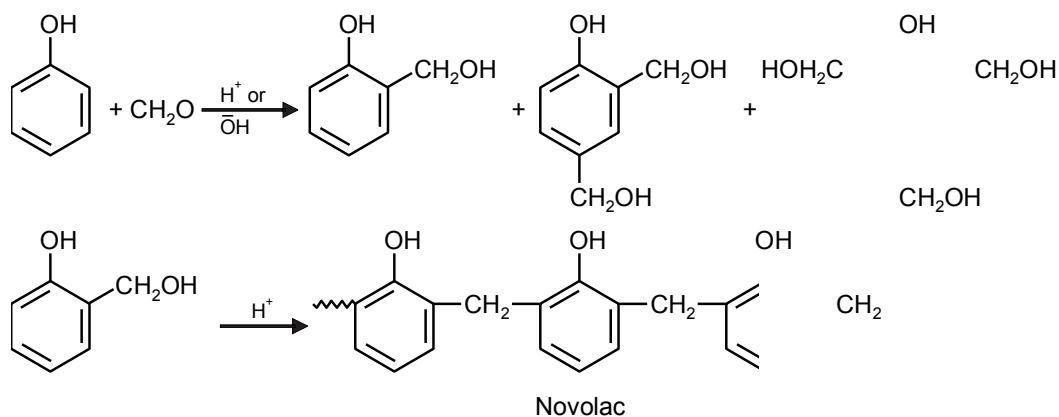
(2) 3-Hydroxybutanoic acid.

(3) 1,3-Butadiene and styrene.

(4) o-Hydroxymethylphenol.

Ans. (4)

Sol. Novolac : It is linear polymer of o-Hydroxymethylphenol.

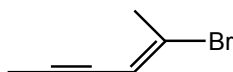


13. BOD values (in ppm) for clean water (A) and polluted water (B) are expected respectively
 (1) $A > 50, B < 27$ (2) $A < 5, B > 17$ (3) $A > 25, B < 17$ (4) $A > 15, B > 47$

Ans. (2)

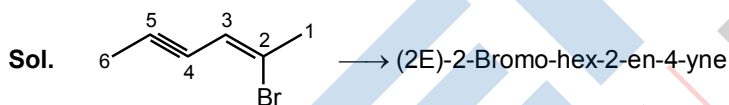
Sol. Clean water would have BOD value of less than 5 ppm whereas highly polluted water could have a BOD value of 17 ppm or more.

14. Choose the correct name for compound given below

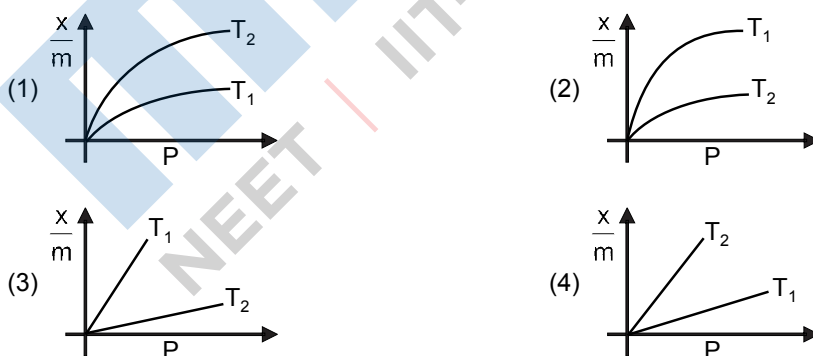


- (1) (2E)-2-Bromo-hex-4-yn-2-ene (2) (2E)-2-Bromo-hex-2-en-4-yne
 (3) (4E)-5-Bromo-hex-2-en-4-yne (4) (4E)-5-Bromo-hex-4-en-2-yne

Ans. (2)



15. Select the graph that correctly describes the adsorption isotherms at two temperatures T_1 and T_2 ($T_1 > T_2$) for a gas : (x – mass of the gas adsorbed, m – mass of adsorbent, P – pressure)



Ans. (1)

Sol. On increase in temperature $\frac{x}{m}$ decreases.

16. Given below are two statements: one is labelled as Assertion (A) and the other is labelled as Reason (R).

Assertion (A) : A simple distillation can be used to separate a mixture of propanol and propanone.

Reason (R) : Two liquids with a difference of more than 20°C in their boiling points can be separated by simple distillations.

In the light of the above statements, choose the most appropriate answer from the options given below:

- (1) (A) is false but (R) is true.
 (2) Both (A) and (R) are correct and (R) is the correct explanation of (A).
 (3) Both (A) and (R) are correct and (R) is not the correct explanation of (A).
 (4) (A) is true but (R) is false.

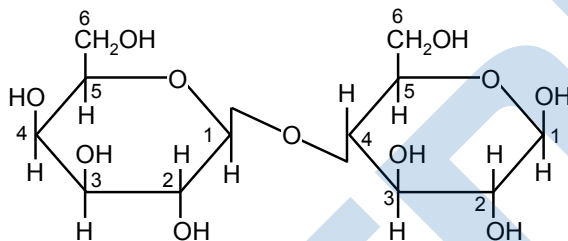
Ans. (2)

17. Which one of the following compounds contains β -C₁-C₄ glycosidic linkage ?

- (1) Maltose (2) Sucrose (3) Lactose (4) Amylose

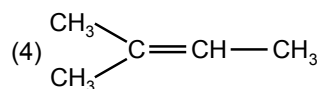
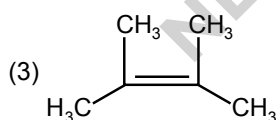
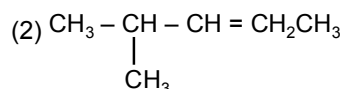
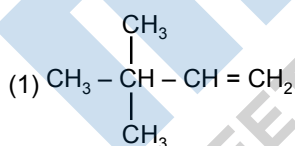
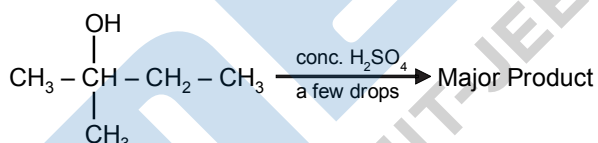
Ans. (3)

Sol. Structure of Lactose (C₁₂H₂₂O₁₁)

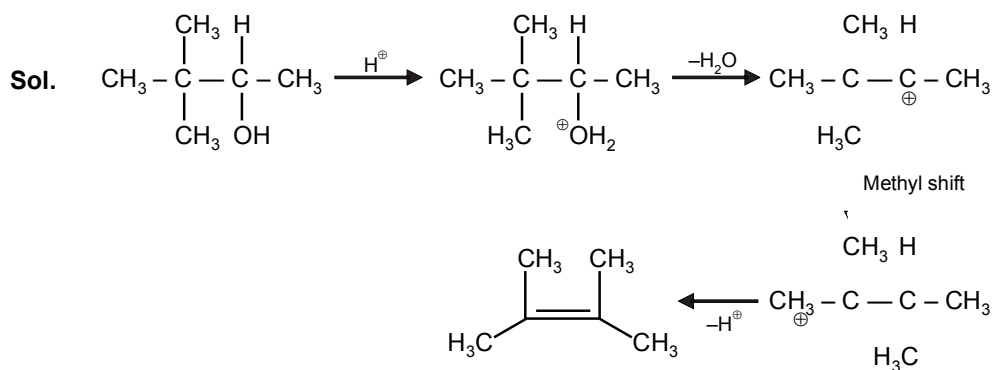


The linkage is between C-1 of β -Galactose and C-4 of β -Glucose.

18. The major product formed in the following reactions is :



Ans. (3)



19. Given below are two statements : one is labelled as Assertion (A) and the other is labelled as Reason (R).

Assertion (A) : Metallic character decreases and non-metallic character increases on moving from left to right in a period.

Reason (R) : It is due to increase in ionisation enthalpy and decrease in electron gain enthalpy, when one moves from left to right in a period.

In the light of the above statements, choose the most appropriate answer from the options given below:

- (1) Both (A) and (R) are correct and (R) is the correct explanation of (A).
- (2) (A) is false but (R) is true.
- (3) (A) is true but (R) is false.
- (4) Both (A) and (R) are correct and (R) is not the correct explanation of (A).

Ans. (3)

Sol. On moving L → R ⇒ Metallic Character ↓ non Metallic Character ↑

It is due increase in both IE & EA.

20. Which one of the following 0.10 M aqueous solutions will exhibit the largest freezing point depression ?

- (1) hydrazine
- (2) glucose
- (3) KHSO₄
- (4) glycine

Ans. (3)

Sol. $\Delta T_f = i k_f m$

As m is same for all electrolyte so

$\Delta T_f \propto i m$

Greater the value of i greater is depression in freezing point

For KHSO₄ i = 3

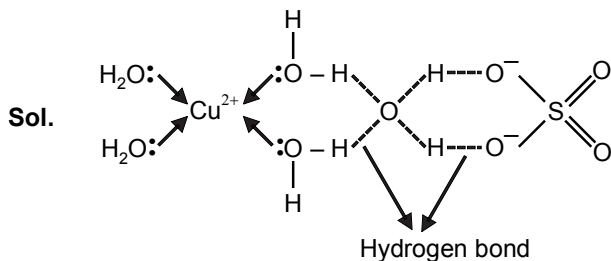
And for Glucose, Ethylene Glycol & glycerol i = 1

Numeric Value Type

This Section contains **10 Numeric Value Type question**, out of 10 only 5 have to be done.

1. The number of hydrogen bonded water molecule(s) associated with stoichiometry $\text{CuSO}_4 \cdot 5\text{H}_2\text{O}$ is _____

Ans. (1)



2. For a first order reaction, the ratio of the time for 75% completion of a reaction to the time for 50% completion is _____

Ans. (2)

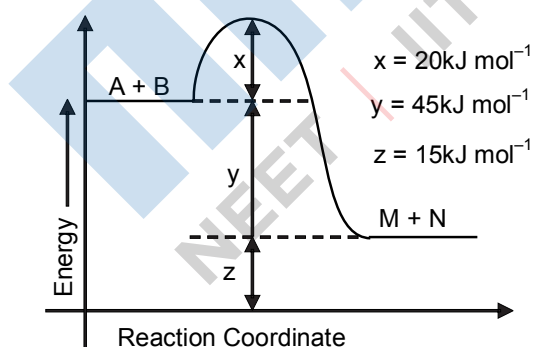
Sol. $T = \frac{2.303}{k} \log \frac{100}{100 - x\%}$

$$T_{75\%} = \frac{2.303}{k} \log \frac{100}{25}$$

$$T_{50\%} = \frac{2.303}{k} \log \frac{100}{50}$$

$$\frac{T_{75\%}}{T_{50\%}} = \frac{\log 4}{\log 2} = 2$$

3. According to the following figure, the magnitude of the enthalpy change of the reaction $\text{A} + \text{B} \rightarrow \text{M} + \text{N}$ in kJ mol^{-1} is equal to _____.



Ans. (45)

Sol. Here $\Delta H_{\text{rxn.}} = y = 45 \text{ KJ/mole}$

4. The number of halogen/(s) forming halic (V) acid is _____

Ans. (3)

Sol. Except F all other halogen form XO_3 ion like ClO_3 , BrO_3 , IO_3

5. The total number of reagents from those given below, that can convert nitrobenzene into aniline is _____.

- I. $Sn - HCl$ II. $Sn - NH_4OH$ III. $Fe - HCl$
 IV. $Zn - HCl$ V. $H_2 - Pd$ VI. $H_2 - Raney\ Nickel$

Ans. (5.00)

Sol. Nitrobenzene converted into Aniline by – $Sn + HCl$, $Fe + HCl$, H_2/Pd , $H_2/Raney\ Ni$.

6. The molarity of the solution prepared by dissolving 6.3 g of oxalic acid ($H_2C_2O_4 \cdot 2H_2O$) in 250 mL of water in $mol\ L^{-1}$ is $x \times 10^{-2}$. The value of x is _____

[Atomic mass : H: 1.0, C : 12.0, O : 16.0]

Ans. (20)

Sol. $M = \frac{W_{solute}}{GMM_{solute}} \times \frac{1000}{V_{ml}}$
 $\frac{6.3}{126} \times \frac{1000}{250} = 0.2M$
 $= 20 \times 10^{-2}$
 So $X = 20$

7. Consider the sulphides HgS , PbS , CuS , Sb_2S_3 , As_2S_3 and CdS . Number of these sulphides soluble in 50% HNO_3 is _____

Ans. (4)

Sol. CdS , PbS , As_2S_3 , and CuS , are soluble in 50% HNO_3 while HgS and Sb_2S_3 are insoluble in 50% HNO_3 but HgS soluble in aqua regia.

8. A_3B_2 is a sparingly soluble salt of molar mass M ($g\ mol^{-1}$) and solubility $x\ gL^{-1}$. The solubility product satisfies $K_{sp} = a \frac{x^5}{M}$. The value of a is _____.

Ans. (108)

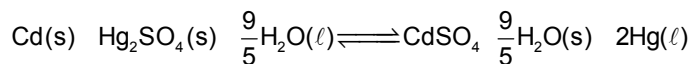
Sol. Solubility $\frac{x}{m}$ mole/ lit
 $A_3B_2(s) \rightleftharpoons 3A^{2+}(aq) + 2B^{3-}(aq)$
 $\frac{3x}{M} \qquad \qquad 2 \frac{x}{M}$
 $K_{sp} = \frac{3x}{M}^3 \frac{2x}{M}^2$
 $(3)^3(2)^2 \frac{x^5}{m}$

$$27 \cdot 4 \frac{x}{m}^5$$

$$108 \frac{x}{m}^5 \quad a \frac{x}{m}^5$$

So a = 108 Ans. 108

9. Consider the following cell reaction



The value of E_{cell}° is 4.315 V at 25°C. If $\Delta H^{\circ} = -825.2 \text{ kJ mol}^{-1}$, the standard entropy change ΔS° in J K^{-1} is _____.

[Given : Faraday constant = 96487 C mol⁻¹]

Ans. (25)

Sol. For given cell reaction n = 2

$$\text{and } \Delta G^{\circ} = -nFE_{\text{cell}}^{\circ}, \Delta G^{\circ} = \Delta H^{\circ} - T\Delta S$$

$$\text{Then } \Delta H^{\circ} - T\Delta S^{\circ} = -nFE_{\text{cell}}^{\circ}$$

$$\Delta H^{\circ} = 825.2 \times 10^3 \text{ J/mole}$$

$$T = 298 \text{ K}$$

$$E_{\text{cell}}^{\circ} = 4.315 \text{ V}$$

$$F = 96485 \text{ Cb}$$

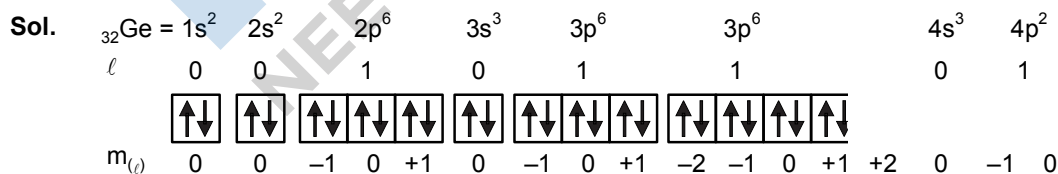
$$S = \frac{nFE_{\text{cell}}^{\circ}}{T} - \frac{\Delta H^{\circ}}{T}$$

$$S = \frac{2 \cdot 96487 \cdot 4.315}{298} - \frac{(825.2 \cdot 10^3)}{298} = \frac{832.682 \cdot 10^3}{298} - \frac{825.2 \cdot 10^3}{298} = \frac{7482}{298} \cdot 10^3$$

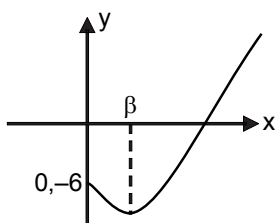
$$\Delta S^{\circ} = 25.1 \text{ J/k}$$

10. Ge (Z = 32) in its ground state electronic configuration has x completely filled orbitals with $m_{\ell} = 0$. The value of x is _____

Ans. (7)



So in Ge (Z = 32) in its ground state electronic configuration has 7 completely filled orbitals with $m_{\ell} = 0$



3. If $\frac{dy}{dx} = \frac{2^x y - 2^x}{2^y}$, $y(0) = 1$ then $y(1)$ is equal to :

- (1) $\log_2(2e)$ (2) $\log_2(2 + e)$ (3) $\log_2(1 + e)$ (4) $\log_2(1 + e^2)$

Ans. (3)

Sol. $\frac{dy}{dx} = \frac{2^x y - 2^x}{2^y} \Rightarrow 2^y \frac{dy}{dx} = \frac{2^x y - 2^x}{2^y}$

$$\frac{2^y dy}{2^y - 1} = 2^x dx$$

Let $2^y - 1 = t \Rightarrow 2^y \ln 2 dy = dt$

$$\frac{dt}{t} \frac{1}{\ln 2} = 2^x dx$$

$$\frac{\ln t}{\ln 2} = \frac{2^x}{\ln 2} + \frac{C}{\ln 2}$$

$$\ln t = 2^x + C$$

when $x = 0, y = 1, C = -1$

$$\ln(2^y - 1) = 2^x - 1$$

$$2^y - 1 = e^{2^x - 1}$$

$$2^y = 1 + e^{2^x - 1}$$

when $x = 1 \Rightarrow 2^y = 1 + e^1 \Rightarrow y = \log_2(1 + e)$

4. Let $*$, $\square \in \{\wedge, \vee\}$ be such that the Boolean expression $(p * \sim q) \Rightarrow (p \square q)$ is a tautology. Then :

- (1) $* = \vee, \square = \vee$ (2) $* = \vee, \square = \wedge$ (3) $* = \wedge, \square = \vee$ (4) $* = \wedge, \square = \wedge$

Ans. (3)

Sol. $(p \wedge \sim q) \rightarrow (p \vee q)$

$$= \sim(p \wedge \sim q) \vee (p \vee q)$$

$$= (\sim p \vee q) \vee (p \vee q)$$

$$= (\sim p \vee p) \vee (q \vee q) = t \vee q$$

$$= t$$

5. Let the equation of the plane, that passes through the point (1, 4, -3) and contains the line of intersection of the planes $3x - 2y + 4z - 7 = 0$ and $x + 5y - 2z + 9 = 0$, be $\alpha x + \beta y + \gamma z + 3 = 0$, that $\alpha + \beta + \gamma$ is equal to :

- (1) 15 (2) 23 (3) -23 (4) -15

Ans. (3)

Sol. Equation of plane $\Rightarrow P_1 + \lambda P_2 = 0$
 $\Rightarrow (3x - 2y + 4z - 7) + \lambda (x + 5y - 2z + 9) = 0$
 Passing through the point (1, 4, -3)
 $\Rightarrow (3 - 8 - 12 - 7) + \lambda (1 + 20 + 6 + 9) = 0$
 $\frac{24}{36} \frac{2}{3}$

Now, Equation of plane is $3 \frac{2}{3} x + y - 2 \frac{10}{3} z + 4 \frac{4}{3} - 7 + 6 = 0$
 $\Rightarrow -11x - 4y - 8z + 3 = 0$
 So, $\alpha + \beta + \gamma = -23$

6. The line $12x \cos\theta + 5y \sin\theta = 60$ is tangent to which of the following curves ?

- (1) $x^2 + y^2 = 169$ (2) $144x^2 + 25y^2 = 3600$ (3) $25x^2 + 12y^2 = 3600$ (4) $x^2 + y^2 = 60$

Ans. (2)

Sol. $\frac{x \cos \theta}{5} + \frac{y \sin \theta}{12} = 1$ (i)
 \Rightarrow Let ellipse $\frac{x^2}{a^2} + \frac{y^2}{b^2} = 1$
 \Rightarrow Equation of tangent at point $(a \cos\theta, b \sin\theta)$
 $\frac{x a \cos \theta}{a^2} + \frac{y b \sin \theta}{b^2} = 1$
 $\frac{x \cos \theta}{a} + \frac{y \sin \theta}{b} = 1$ (ii)
 Using equation (i) and (ii) $\Rightarrow a = 5$ $b = 12$
 Equation of ellipse is $\frac{x^2}{25} + \frac{y^2}{144} = 1$

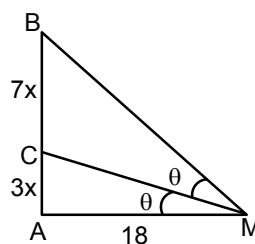
7. A vertical pole fixed to the horizontal ground is divided in the ratio 3 : 7 by a mark on it with lower part shorter than the upper part. If the two parts subtend equal angles at a point on the ground 18m away from the base of the pole, then the height of the pole (in meters) is :

- (1) $12\sqrt{15}$ (2) $6\sqrt{10}$ (3) $8\sqrt{10}$ (4) $12\sqrt{10}$

Ans. (4)

Sol. $\tan \frac{x}{6}$

$$\begin{aligned} \tan 2\theta &= \frac{10x}{18} - \frac{5x}{9} \\ &= \frac{5x}{9} - \frac{x}{3} \\ &= \frac{5x - 3x}{9} = \frac{2x}{9} \\ \Rightarrow \frac{2x}{9} &= \frac{3}{5} \\ x &= \frac{27}{10} \end{aligned}$$



$$\begin{aligned} x^2 &= \frac{72}{5} & x &= \frac{6\sqrt{2}}{\sqrt{5}} \\ \Rightarrow \text{Length of pole} &= 10x = \frac{60\sqrt{2}}{\sqrt{5}} = \frac{60\sqrt{10}}{5} = 12\sqrt{10} \end{aligned}$$

8. The integral $\int \frac{1}{\sqrt[4]{(x-1)^3(x-2)^5}} dx$ is equal to :

(where C is a constant of integration)

- (1) $\frac{4}{3} \frac{x-1}{x-2}^{\frac{5}{4}} C$ (2) $\frac{4}{3} \frac{x-1}{x-2}^{\frac{1}{4}} C$ (3) $\frac{3}{4} \frac{x-2}{x-1}^{\frac{1}{4}} C$ (4) $\frac{3}{4} \frac{x-2}{x-1}^{\frac{5}{4}} C$

Ans. (2)

Sol. $I = \int \frac{dx}{\sqrt[4]{(x-1)^3(x-2)^5}}$

$$I = \int \frac{dx}{(x-2)^{5/4} (x-1)^2}$$

Let $\frac{(x-2)}{(x-1)} = t$ $\frac{3}{(x-1)^2} dx = dt$ $I = \int \frac{1}{3} t^{1/4} \frac{1}{1} dt = \frac{4}{3} \frac{x-1}{x-2}^{1/4} C$

9. If p and q are the lengths of the perpendiculars from the origin on the lines, $x \operatorname{cosec} \alpha - y \sec \alpha = k \cot 2\alpha$ and $x \sin \alpha + y \cos \alpha = k \sin 2\alpha$ respectively, then k^2 is equal to :

- (1) $p^2 + 4q^2$ (2) $2p^2 + q^2$ (3) $p^2 + 2q^2$ (4) $4p^2 + q^2$

Ans. (4)

Sol. $L_1 : x \operatorname{cosec} \alpha - y \sec \alpha = k \cot 2\alpha$

$$\frac{x}{\sin \alpha} - \frac{y}{\cos \alpha} = k \frac{\cos 2\alpha}{\sin 2\alpha}$$

$$x \cos \alpha + y \sin \alpha = \frac{k}{2} \cos 2\alpha$$

Perpendicular distance from (0, 0) is p
$$= \frac{\begin{vmatrix} 0 & 0 & \frac{k}{2} \cos 2\alpha \\ \cos^2 \alpha & \sin^2 \alpha & 0 \end{vmatrix}}{\sqrt{\cos^2 \alpha + \sin^2 \alpha}}$$

$$p^2 = \frac{k^2}{4} \cos^2 2\alpha$$

$$L_2 : x \sin \alpha + y \cos \alpha - k \sin 2\alpha = 0$$

Perpendicular distance from (0, 0) is q
$$= \frac{\begin{vmatrix} 0 & 0 & k \sin 2\alpha \\ \sin^2 \alpha & \cos^2 \alpha & 0 \end{vmatrix}}{\sqrt{\sin^2 \alpha + \cos^2 \alpha}}$$

$$\Rightarrow q^2 = k^2 \sin^2 2\alpha$$

$$4p^2 + q^2 = k^2 (\sin^2 2\alpha + \cos^2 2\alpha)$$

$$4p^2 + q^2 = k^2$$

10. The sum of 10 terms of the series $\frac{3}{1^2 - 2^2} - \frac{5}{2^2 - 3^2} + \frac{7}{3^2 - 4^2} - \dots$ is :

- (1) 1 (2) $\frac{143}{144}$ (3) $\frac{120}{121}$ (4) $\frac{99}{100}$

Ans. (3)

Sol.
$$\sum_{r=1}^{10} \frac{(2r-1)}{r^2 - (r+1)^2}$$

$$\sum_{r=1}^{10} \frac{1}{r^2} - \frac{1}{(r+1)^2}$$

$$\frac{1}{1^2} - \frac{1}{2^2} + \frac{1}{2^2} - \frac{1}{3^2} + \frac{1}{3^2} - \frac{1}{4^2} + \dots + \frac{1}{10^2} - \frac{1}{11^2} + 1 - \frac{1}{121} = \frac{120}{121}$$

11. The length of the latus rectum of parabola, whose vertex and focus are on the positive x-axis at a distance R and S (>R) respectively from the origin, is :

- (1) 2(S+R) (2) 4(S+R) (3) 4(S-R) (4) 2(S-R)

Ans. (3)

Sol. $y^2 = 4a(x - R)$

$$y^2 = 4(S - R)(x - R)$$

Length of LR = 4(S - R)

12. The function $f(x) = |x^2 - 2x - 3| \cdot e^{9x^2 - 12x - 4}$ is not differentiable at exactly :

- (1) one point (2) two points (3) four points (4) three points

Ans. (2)

Sol. $f(x) = |x^2 - 2x - 3| \cdot e^{9x^2 - 12x - 4}$

$$f(x) = \begin{cases} (x^2 - 2x + 3)e^{(3x-2)^2}; & x < 1 \\ (x^2 - 2x + 3)e^{(3x-2)^2}; & 1 \leq x < 3 \\ (x^2 - 2x + 3)e^{(3x-2)^2}; & 3 \leq x \end{cases}$$

Now, clearly non differentially at $x = -1, 3$

13. $\lim_{x \rightarrow 0} \frac{\sin^2 x - \cos^4 x}{x^4}$ is equal to :

- (1) 4π (2) $2\pi^2$ (3) $4\pi^2$ (4) π^2

Ans. (3)

So. $\lim_{x \rightarrow 0} \frac{\sin^2 x - \cos^4 x}{x^4}$

$$\lim_{x \rightarrow 0} \frac{\sin^2 x - 1 + \sin^4 x + 2\sin^2 x}{x^4} = \lim_{x \rightarrow 0} \frac{\sin^2 x - 2\sin^2 x + \sin^4 x}{x^4}$$

$$\lim_{x \rightarrow 0} \frac{\sin^2 x - 2\sin^2 x + \sin^4 x}{x^4} = \lim_{x \rightarrow 0} \frac{\sin^2 x - 2\sin^2 x + \sin^4 x}{2\sin^2 x - \sin^4 x} = \lim_{x \rightarrow 0} \frac{\sin^2 x - 2\sin^2 x + \sin^4 x}{2\sin^2 x - \sin^4 x}$$

$$= \lim_{x \rightarrow 0} \frac{\sin^2 x - 2\sin^2 x + \sin^4 x}{2\sin^2 x - \sin^4 x} = \lim_{x \rightarrow 0} \frac{\sin^2 x - 2\sin^2 x + \sin^4 x}{2\sin^2 x - \sin^4 x}$$

14. If the function $f(x) = \begin{cases} \frac{1}{x} \log \frac{1+x}{1-x}, & x \neq 0 \\ k, & x = 0 \end{cases}$ is continuous at $x = 0$, then $\frac{1}{a} - \frac{1}{b} + \frac{4}{k}$ is equal to :

- (1) 4 (2) -5 (3) 5 (4) -4

Ans. (2)

Sol. LHL $\lim_{x \rightarrow 0} \frac{\log \frac{1+x}{1-x}}{x}$

$$\lim_{x \rightarrow 0} \frac{\log \frac{1+x}{1-x}}{x} = \lim_{x \rightarrow 0} \frac{\log \frac{1+x}{1-x}}{x}$$

$$\lim_{x \rightarrow 0} \frac{\log \frac{1+x}{1-x}}{\frac{x}{a}} = \frac{1}{a} \lim_{x \rightarrow 0} \frac{\log \frac{1+x}{1-x}}{\frac{x}{b}} = \frac{1}{b} \lim_{x \rightarrow 0} \frac{\log \frac{1+x}{1-x}}{\frac{x}{a}} = \frac{1}{b} \cdot \frac{1}{a} = \frac{1}{ab}$$

$$\text{RHL } \lim_{x \rightarrow 0} \frac{\cos^2 x \sin^2 x}{\sqrt{x^2 - 1} \cdot 1} \cdot \frac{1}{\sqrt{x^2 - 1} \cdot 1}$$

$$\lim_{x \rightarrow 0} \frac{2\sin^2 x}{x^2} \cdot \sqrt{x^2 - 1} \cdot 1 \cdot 1 = 4$$

So, $\frac{1}{b} \cdot \frac{1}{a} = k = 4$ $\frac{1}{a} \cdot \frac{1}{b} = \frac{4}{k} = 4 \cdot 1 = 5$

15. Which of the following is not correct for relation R on the set of real numbers ?

- (1) $(x, y) \in R \Leftrightarrow |x - y| \leq 1$ is reflexive and symmetric
- (2) $(x, y) \in R \Leftrightarrow 0 < |x| - |y| \leq 1$ is neither transitive nor symmetric
- (3) $(x, y) \in R \Leftrightarrow |x| - |y| \leq 1$ is reflexive but not symmetric
- (4) $(x, y) \in R \Leftrightarrow 0 < |x - y| \leq 1$ is symmetric and transitive

Ans. (4)

Sol. $\begin{matrix} 0 & |x & y| & 1 \\ 0 & |y & x| & 1 \end{matrix}$ is symmetric

let

$$0 < |x - y| \leq 1 \quad \dots\dots(1)$$

$(1, 2) \in R$ and $(2, 3) \in R$ satisfy the equation (1)

but $(1, 3) \notin R$ not satisfied

Hence $0 < |x - y| \leq 1$ is symmetric but not transitive relation

16. cosec 18° is a root of the equation:

- (1) $x^2 - 2x - 4 = 0$
- (2) $4x^2 + 2x - 1 = 0$
- (3) $x^2 - 2x + 4 = 0$
- (4) $x^2 + 2x - 4 = 0$

Ans. (1)

Sol. $\sin 18 = \frac{\sqrt{5} - 1}{4}$

$$\text{cosec } 18 = \frac{4}{\sqrt{5} - 1} \cdot \frac{\sqrt{5} + 1}{\sqrt{5} + 1} = \sqrt{5} + 1$$

Hence equation $x = \sqrt{5} + 1$

$$(x - 1)^2 = 5$$

$$x^2 - 2x - 4 = 0$$

17. If the following system of linear equations

$$2x + y + z = 5$$

$$x - y + z = 3$$

$$x + y + az = b$$

has no solution, then :

- (1) $a = \frac{1}{3}, b = \frac{7}{3}$
- (2) $a = \frac{1}{3}, b = \frac{7}{3}$
- (3) $a = \frac{1}{3}, b = \frac{7}{3}$
- (4) $a = \frac{1}{3}, b = \frac{7}{3}$

Ans. (1)

Sol. $D \begin{vmatrix} 2 & 1 & 1 \\ 1 & 1 & 1 \\ 1 & 1 & a \end{vmatrix} \begin{matrix} 0 & 2 & 1 & 3a & 0 & a \\ & & & & & \frac{1}{3} \end{matrix}$

$D_1 \begin{vmatrix} 5 & 1 & 1 \\ 3 & 1 & 1 \\ b & 1 & a \end{vmatrix} \begin{matrix} 2 & b \\ & \frac{7}{3} \end{matrix}$

$D_3 \begin{vmatrix} 2 & 5 & 1 \\ 1 & 3 & 1 \\ 1 & b & a \end{vmatrix} \begin{matrix} \frac{7}{3} \\ b \end{matrix}$

$D_3 \begin{vmatrix} 2 & 1 & 5 \\ 1 & 1 & 3 \\ 1 & 1 & b \end{vmatrix} \begin{matrix} 7 & 3b \end{matrix}$

For the system to have no solution $b = \frac{7}{3}$

18. Three number are in an increasing geometric progression with common ratio r . If the middle number is doubled, then the new numbers are in an arithmetic progression with common difference d . If the fourth term of GP is $3r^2$, then $r^2 - d$ is equal to :

- (1) $7\sqrt{3}$ (2) $7 - 3\sqrt{3}$ (3) $7 - 7\sqrt{3}$ (4) $7 - \sqrt{3}$

Ans. (4)

Sol. $\frac{a}{r}, a, ar, 3r^2$ G.P.

and $\frac{a}{r}, 2a, ar$ A.P.

$ar^2 = 3r^2$

$a = 3$

$4a = ar + \frac{a}{r}$

$4 = r + \frac{1}{r}$

$r^2 + 1 = 4r$

$r^2 - 4r + 1 = 0$ $r = \frac{4 \pm \sqrt{12}}{2} = 2 \pm \sqrt{3}$ $2 - \sqrt{3}$ rejected

$d = 2a - \frac{a}{r} = a \left(2 - \frac{1}{r} \right) = 3 \left(2 - \frac{1}{2 + \sqrt{3}} \right) = 3 \left(2 - \frac{2 + \sqrt{3}}{2 + \sqrt{3}} \right) = 3\sqrt{3}$

Hence $r^2 - d = 2 + \sqrt{3} - 3\sqrt{3} = 7 - \sqrt{3}$

19. Let f be a non-negative function in $[0, 1]$ and twice differentiable in $(0, 1)$.

If $\int_0^x \sqrt{1 - f'(t)^2} dt = \int_0^x f(t) dt, 0 \leq x \leq 1$ and $f(0) = 0$, then $\lim_{x \rightarrow 0} \frac{1}{x^2} \int_0^x f(t) dt :$

- (1) equal 1 (2) does not exist (3) equals 0 (4) equals $\frac{1}{2}$

Ans. (4)

Sol. $\int_0^x \sqrt{1 - f'(t)^2} dt = \int_0^x f(t) dt$

Diff w.r.t. x

$$\sqrt{1 - f'(x)^2} = f(x)$$

$$\Rightarrow 1 - (f'(x))^2 = (f(x))^2 \Rightarrow (f'(x))^2 = 1 - (f(x))^2$$

$$\frac{dy}{dx} = \sqrt{1 - y^2} \Rightarrow \frac{dy}{\sqrt{1 - y^2}} = dx$$

by integration

$$\sin^{-1} y = \pm x + C$$

$$\because y(0) = 0 \therefore C = 0$$

but f is non negative

$$\therefore \sin^{-1} y = x \Rightarrow y = \sin x$$

Now $\lim_{x \rightarrow 0} \frac{1}{x^2} \int_0^x \sin t dt$

$$\lim_{x \rightarrow 0} \frac{1 - \cos x}{x^2} = \frac{1}{2}$$

20. If $a_r = \cos \frac{2r}{9} + i \sin \frac{2r}{9}, r = 1, 2, 3, \dots, 9$, then the determinant $\begin{vmatrix} a_1 & a_2 & a_3 \\ a_4 & a_5 & a_6 \\ a_7 & a_8 & a_9 \end{vmatrix}$ is equal to :

- (1) $a_2 a_6 - a_4 a_8$ (2) $a_1 a_9 - a_3 a_7$ (3) a_9 (4) a_5

Ans. (2)

Sol. $\begin{vmatrix} a_1 & a_2 & a_3 \\ a_4 & a_5 & a_6 \\ a_7 & a_8 & a_9 \end{vmatrix} = \begin{vmatrix} e^{i\frac{2}{9}} & e^{i\frac{4}{9}} & e^{i\frac{6}{9}} \\ e^{i\frac{8}{9}} & e^{i\frac{10}{9}} & e^{i\frac{12}{9}} \\ e^{i\frac{14}{9}} & e^{i\frac{16}{9}} & e^{i\frac{18}{9}} \end{vmatrix} = e^{i\frac{2}{9} + i\frac{8}{9} + i\frac{14}{9}} \begin{vmatrix} 1 & e^{i\frac{2}{9}} & e^{i\frac{4}{9}} \\ 1 & e^{i\frac{2}{9}} & e^{i\frac{4}{9}} \\ 1 & e^{i\frac{2}{9}} & e^{i\frac{4}{9}} \end{vmatrix} = 0$

Now $a_1 = e^{i\frac{2}{9}}, a_9 = e^{i\frac{18}{9}} = 1$

$$a_1 a_9 - a_3 a_7 = e^{i\frac{2}{9}} \cdot 1 - e^{i\frac{12}{9}} \cdot e^{i\frac{14}{9}} = 0$$

Numeric Value Type

This Section contains **10 Numeric Value Type** question, out of 10 only 5 have to be done.

1. Let $[t]$ denote the greatest integer $\leq t$. Then the value of $\int_{\frac{1}{2}}^1 ([2x] - |x|) dx$ is _____.

Ans. (5)

Sol.
$$\int_{\frac{1}{2}}^1 ([2x] - |x|) dx$$

$$= \int_{\frac{1}{2}}^0 (1 - x) dx + \int_0^{\frac{1}{2}} (0 - x) dx + \int_{\frac{1}{2}}^1 (1 - x) dx$$

$$= x - \frac{x^2}{2} \Big|_{\frac{1}{2}}^0 - \frac{x^2}{2} \Big|_0^{\frac{1}{2}} + x - \frac{x^2}{2} \Big|_{\frac{1}{2}}^1$$

$$(0) - \left(\frac{1}{2} - \frac{1}{8} \right) - \left(\frac{1}{8} - 0 \right) + \left(1 - \frac{1}{2} \right) - \left(\frac{1}{2} - \frac{1}{8} \right) = \frac{5}{8}$$

$$\int_{\frac{1}{2}}^1 ([2x] - |x|) dx = \frac{5}{8}$$

2. The number of six letter words (with or without meaning), formed using all the letters of the word 'VOWELS', so that all the consonants never come together, is _____.

Ans. (576)

Sol. VOWELS

 all the consonants never come together
 = Total – all consonants come together
 = $6! - 4! \times 3! = 576$

3. An electric instrument consists of two units. Each unit must function independently for the instrument to operate. The probability that the first unit functions is 0.9 and that of the second unit is 0.8. The instrument is switched on and it fails to operate. If the probability that only the first unit failed and second unit is functioning is p. then 98 p is equal to _____.

Ans. (28)

Sol. E_1 = first unit is working
 E_2 = second unit is working
 $P(E_1) = 0.9$ $P(E_2) = 0.8$
 $P(\bar{E}_1) = 0.1$ $P(\bar{E}_2) = 0.2$
 $P = \frac{0.8 \times 0.1}{0.1 \times 0.2 + 0.9 \times 0.2 + 0.1 \times 0.8} = \frac{8}{28}$

So, $98P = 98 \cdot \frac{8}{28} = 28$

4. If $\frac{3^6}{4^4} k$ is the term, independent of x , in the binomial expansion of $\left(\frac{x}{4} + \frac{12}{x^2}\right)^{12}$, then k is equal to ____.

Ans. (55)

Sol. $T_{r+1} = {}^{12}C_r \left(\frac{x}{4}\right)^{12-r} \left(\frac{12}{x^2}\right)^r = {}^{12}C_r \left(\frac{1}{4}\right)^{12-r} (12)^r x^{12-2r}$
 $\Rightarrow 12 - 3r = 0$
 $\Rightarrow r = 4$

So term independent from x is $T_5 = {}^{12}C_4 \frac{1}{4^8} 3^4 4^4 = {}^{12}C_4 \frac{3^4}{4^4} = 55 \frac{3^6}{4^4}$

5. The square of the distance of the point of intersection of the line $\frac{x}{2} + \frac{y}{3} + \frac{z}{6} = 1$ and the plane $2x - y + z = 6$ from the point $(-1, -1, 2)$ is _____.

Ans. (61)

Sol. Equation of line

$$\frac{x}{2} + \frac{y}{3} + \frac{z}{6} = 1$$

\Rightarrow Let $P(2\lambda + 1, 3\lambda + 2, 6\lambda - 1)$ is point of intersection of line and plane

$$\Rightarrow 2(2\lambda + 1) - 3\lambda - 2 + 6\lambda - 1 = 6$$

$$7\lambda = 7 \Rightarrow \lambda = 1$$

Point $P(3, 5, 5)$

Square of distance from point $(-1, -1, 2)$ is
 $= 4^2 + 6^2 + 3^2 = 61$

6. If the variable line $3x + 4y = \alpha$ lies between the two circles

$(x - 1)^2 + (y - 1)^2 = 1$ and $(x - 9)^2 + (y - 1)^2 = 4$, without intercepting a chord on either circle, then the sum of all the integral values of α is _____.

Ans. (165)

Sol. Line lies between the two circle

$$(10 - \alpha)(31 - \alpha) < 0$$

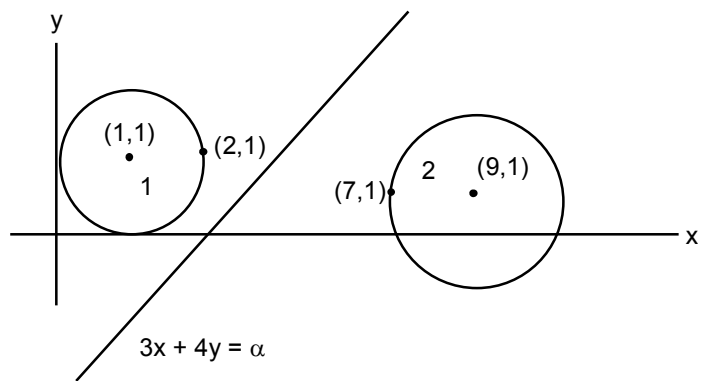
$$10 < \alpha < 31 \quad \dots\dots(1)$$

As well as line can be tangent to the circle

$$P_1 \Rightarrow (\text{distance of } (1, 1) \text{ from line})$$

$$P_2 \Rightarrow (\text{distance of } (9, 1) \text{ from line})$$

$$P_1 \geq r_1 \Rightarrow |7 - \alpha| \geq 10$$



$$\Rightarrow \alpha \in (-\infty, 2] \cup [12, \infty) \dots\dots(2)$$

$$P_2 \geq r_2 \Rightarrow |(31 - \alpha) \geq 10 \Rightarrow \alpha \in (-\infty, 21] \cup [41, \infty) \dots\dots (3)$$

$$(1) \cap (2) \cap (3) \Rightarrow 12 \leq \alpha \leq 21$$

$$\text{sum of integer value of } \alpha = 12 + 13 + \dots\dots 21 = \frac{10}{2}(33) = 165$$

7. A point z moves in the complex plane such that $\arg \frac{z-2}{z-2-i} = \frac{\pi}{4}$, then the minimum value of $|z - 9\sqrt{2} - 2i|^2$ is equal to _____ .

Ans. (98)

Sol. $\arg \frac{z-2}{z-2-i} = \frac{\pi}{4}$

$$\arg \frac{x-iy-2}{x-iy-2-i} = \frac{\pi}{4}$$

$$\arg \frac{x-iy-2}{x-iy-2-i} = \frac{x-2}{x-2-iy} = \frac{\pi}{4}$$

$$\arg \frac{x^2 - y^2 - 4 + 4iy}{(x-2)^2 - y^2} = \frac{\pi}{4}$$

$$\frac{x^2 - y^2 - 4}{4y} = 1$$

$$x^2 + (y-2)^2 = 8 \dots\dots(1)$$

Equation (1) is represent circle, whose centre (0,2) and radius $2\sqrt{2}$

Minimum distance $d = |AC - r|$

$$\text{given point } A = 9\sqrt{2}, 2 \quad |AC - r| = |9\sqrt{2} - 2\sqrt{2}| = 7\sqrt{2}$$

$$\Rightarrow \text{square of distance } d^2 = 7\sqrt{2}^2 = 98$$

8. If 'R' is the least value of 'a' such that the function $f(x) = x^2 + ax + 1$ is increasing on [1,2] and 'S' is the greatest value of 'a' such that the function $f(x) = x^2 + ax + 1$ is decreasing on [1,2], then the value of $|R - S|$ is _____ .

Ans. (2)

Sol. If $f'(x) = 2x + a \geq 0 \forall x \in [1,2] \Rightarrow a \geq -2x \forall x \in [1,2]$

$$a_{\min} = R = -2$$

$$\text{If } f'(x) \leq 0 \forall x \in [1,2] \Rightarrow 2x + a \leq 0 \Rightarrow a \leq -2x \forall x \in [1,2]$$

$$a \leq -4$$

$$a_{\max} = S = -4$$

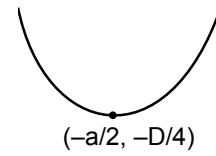
$$|R - S| = 2$$

Alternate :

If $f(x)$ is increasing for all $x \in [1,2]$ then $\frac{a}{2} \leq 1 \leq a \leq 2$ $R \leq 2$

If $f(x)$ is decreasing for $x \in [1,2]$, then $\frac{a}{2} \geq 2 \geq a \geq 4$ $S \leq 4$

$|R - S| = 2$



9. If $x \phi'(x) = \int_5^x (3t^2 - 2) dt$, $x > -2$ and $\phi(0) = 4$, then $\phi(2)$ is _____ .

Ans. (4)

Sol. $x \phi'(x) = \int_5^x (3t^2 - 2) dt$

$\phi(0) = 4 \quad x > -2$

$\Rightarrow x \phi'(x) + 1\phi(x) = 3x^2 - 2 \phi'(x)$

$\Rightarrow (x + 2) \phi'(x) + \phi(x) = 3x^2$

I.F. $e^{\int \frac{1}{x+2} dx} = x + 2$

$(x + 2) \phi(x) = \int (x + 2) \frac{3x^2}{x + 2} dx$

$\Rightarrow \phi(x) \cdot (x + 2) = x^3 + c$

$\Rightarrow \phi(0) = 4$

$c = 8$

(2) $\frac{8 + 8}{4} = 4$

10. The mean of 10 numbers $7 \times 8, 10 \times 10, 13 \times 12, 16 \times 14, \dots$ is _____ .

Ans. 398

Sol. $\sum_{r=1}^{10} (3r - 4)(2r + 6)$
 $\sum_{r=1}^{10} (6r^2 - 26r + 24) = 6 \sum_{r=1}^{10} r^2 - 26 \sum_{r=1}^{10} r + 24 \sum_{r=1}^{10} 1$
 $= 6 \frac{10 \cdot 11 \cdot 21}{6} - 26 \frac{10 \cdot 11}{2} + 240$

$= 2310 + 1430 + 240 = 3980$

mean = 398